

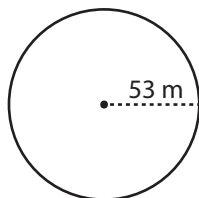
Name : _____

Score : _____

Circle - Circumference

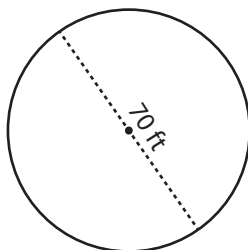
Find the circumference of each circle. Round the answer to tenth decimal place. (use $\pi=3.14$)

1)



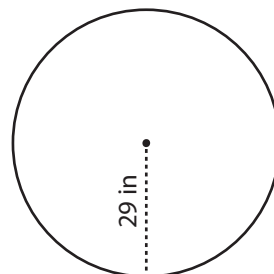
Circumference = _____

2)



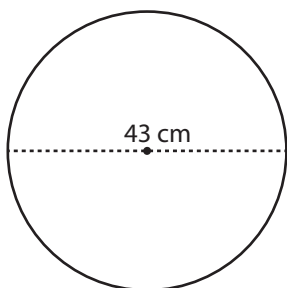
Circumference = _____

3)



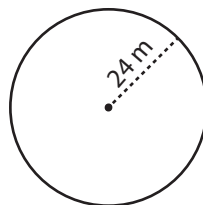
Circumference = _____

4)



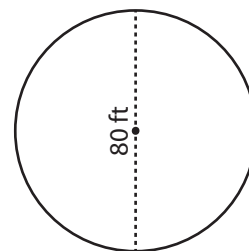
Circumference = _____

5)



Circumference = _____

6)



Circumference = _____

7) Calculate the circumference of a circle having a diameter of 66 cm.

Circumference = _____

8) What is the circumference of a circle with a radius of 31 ft?

Circumference = _____